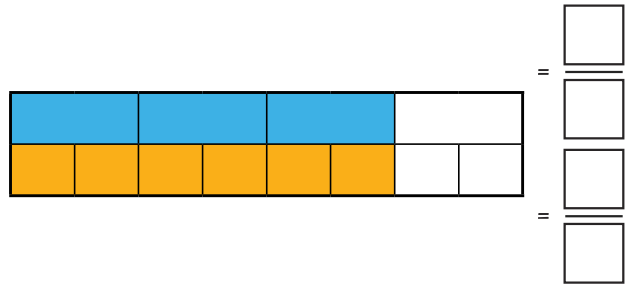
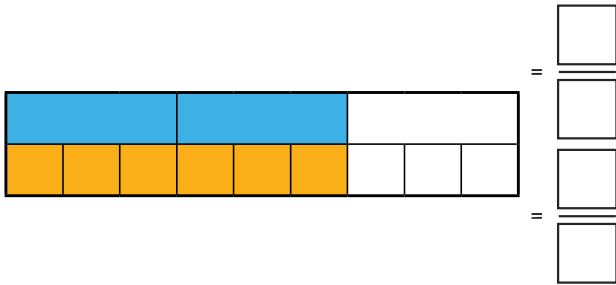
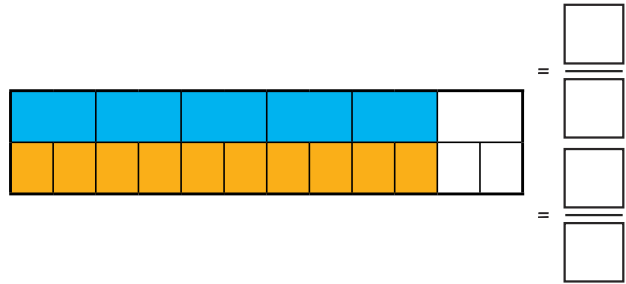
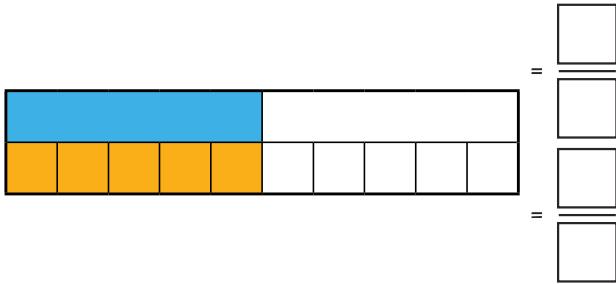


1) Write the fraction that each bar represents to show that the fractions are equivalent.



2) Complete these equivalent fraction statements.

What method could you use to find the missing numerator or denominator for each one?

a)

$$\frac{4}{5} = \frac{\square}{10}$$

b)

$$\frac{6}{18} = \frac{\square}{6}$$

c)

$$\frac{2}{3} = \frac{10}{\square}$$
